
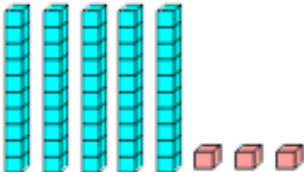



1)	12 subtract 5	
2)	Which month comes before August? April September June March July	
3)	How much money? 	p
4)	Double 6	
5)	How many? 	
6)	Add up 3, 5 and 2	
7)	What number comes after 49?	
8)	Tick the rectangle. 	
9)	Captain drinks 5 cups of water. Frazer drinks 6 cups. How many cups have they both drunk in total?	
10)	Flame is 10 years old. Tyger is 6 years old. How much older is Flame?	
11)	A large pack of crisps costs £3. How much do 3 packs cost?	
12)	I have £15. I spend £7. How much do I have left?	£

Word of the day (x 5)

altogether

Test

11.12.20

1 $8 + 9 =$

2 $17 - 6 =$

5 $4 + 6 + 7 =$

6 $86 - 30 =$

3 $25 + 5 + 5 =$

4 $6 + 4 =$

7 $2 \times 6 =$

8 $3 \times 6 =$

11.12.20

Complete this calculation.

$\div 4 = 5$

16. Circle the longer time interval.

1 hour

65 minutes

17. A shop sells bags of tennis balls in packs of 5.



In a week the shop sells 35 balls.

How many packs of tennis balls are sold?