

Maths lesson for Monday 16th November

One less than 1	One more than
Number of the day 7	
Write the number	Draw the number

1	2	3	4	5	6	7	8	9	10
one	two	three	four	five	six	seven	eight	nine	ten
11	12	13	14	15	16	17	18	19	20
eleven	twelve	thirteen	fourteen	fifteen	sixteen	seventeen	eighteen	nineteen	twenty

In Focus



My friend has 7 beans in total. He has 5 beans in one hand.

How many beans are in the other hand?

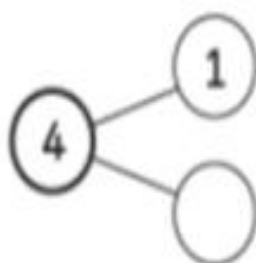
How can you tell?



Completing Number Sentences

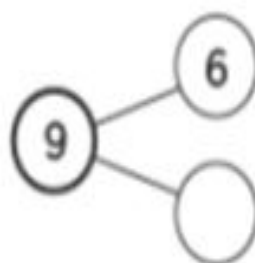
- 1** Complete the number bonds.
Write the missing numbers.

(a)



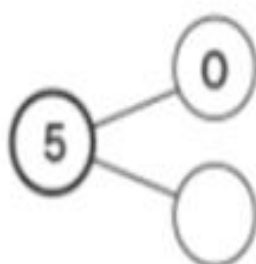
$$4 = 1 + \square$$

(b)



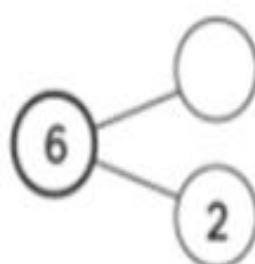
$$9 = 6 + \square$$

(c)



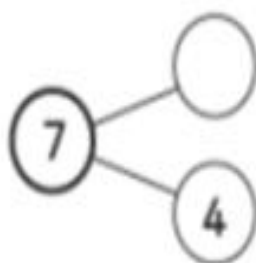
$$5 = 0 + \square$$

(d)



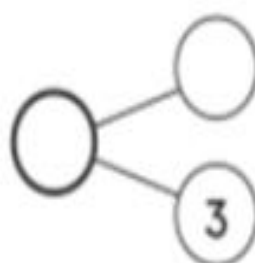
$$6 = \square + 2$$

(e)



$$7 = \square + 4$$

(f)



$$8 = \square + 3$$